

Ten Important Hardwoods

Name: _____

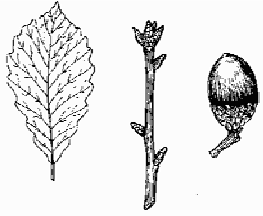
Directions: Write the appropriate tree name underneath the leaf, the tree names have been provided. Then, identify a leaf in each of the following categories: simple, compound, alternate, and opposite

hickory
American beech
white oak

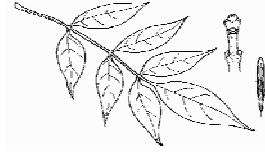
chestnut oak
red maple
red oak

sugar maple
yellow poplar

white ash
black cherry



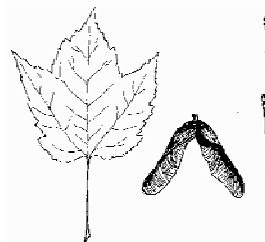
1. _____



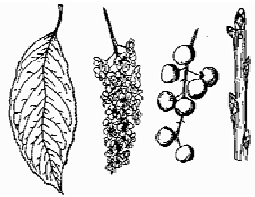
6. _____



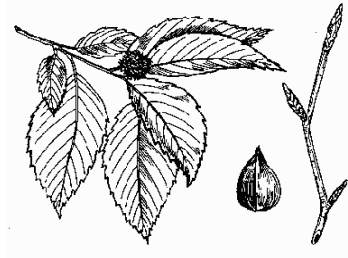
2. _____



7. _____



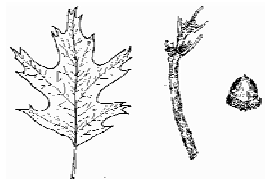
3. _____



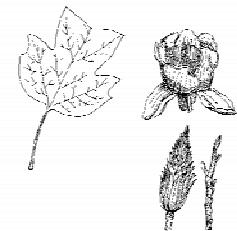
8. _____



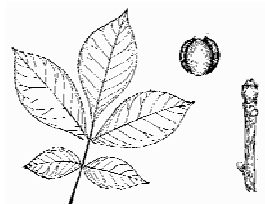
4. _____



9. _____



5. _____



10. _____